

Addition und Subtraktion im Zahlenraum 10 000

Code Nr. 1

Nr. 1

Name:
Klasse:

Datum:

1.) ●●	$2\ 000 + 20 = \underline{\hspace{2cm}}$	$3\ 000 + 1\ 100 = \underline{\hspace{2cm}}$	A 1	2020 4100
2.) ●●	$2\ 200 - 2\ 200 = \underline{\hspace{2cm}}$	$210 + 3\ 000 = \underline{\hspace{2cm}}$	A 2	0 3210
3.) ●●	$2\ 000 + 1\ 000 = \underline{\hspace{2cm}}$	$2\ 200 + 3\ 000 = \underline{\hspace{2cm}}$	A 3	3000 5200
4.) ●●	$800 + 1\ 600 = \underline{\hspace{2cm}}$	$3\ 000 + 500 = \underline{\hspace{2cm}}$	A 4	2400 3500
5.) ●●	$5\ 000 + 1\ 103 = \underline{\hspace{2cm}}$	$3\ 400 + 1 = \underline{\hspace{2cm}}$	A 5	6103 3401
6.) ●●	$4\ 057 - \underline{\hspace{2cm}} = 2057$	$4\ 500 - \underline{\hspace{2cm}} = 4000$	A 6	2 000 500
7.) ●●	$3\ 000 + \underline{\hspace{2cm}} = 3800$	$2\ 475 - \underline{\hspace{2cm}} = 1475$	A 7	800 1 000
8.) ●●	$5\ 700 + 1\ 000 = \underline{\hspace{2cm}}$	$4\ 846 - 1\ 100 = \underline{\hspace{2cm}}$	A 8	6700 3746
9.) ●●	$4\ 300 + \underline{\hspace{2cm}} = 6300$	$7\ 000 + \underline{\hspace{2cm}} = 7170$	A 9	2 000 170
10.) ●●	$1\ 300 - \underline{\hspace{2cm}} = 300$	$2\ 000 + \underline{\hspace{2cm}} = 7400$	A 10	1 000 5 400
11.) ●●	$7\ 093 - \underline{\hspace{2cm}} = 6753$	$\underline{\hspace{2cm}} - 2\ 400 = 2200$	A 11	340 4 600
12.) ●●	$\underline{\hspace{2cm}} + 2\ 700 = 5700$	$\underline{\hspace{2cm}} + 2\ 100 = 4100$	A 12	3 000 2 000
13.) ●●	$4\ 000 + \underline{\hspace{2cm}} = 5900$	$\underline{\hspace{2cm}} - 3\ 500 = 1903$	A 13	1 900 5 403
14.) ●●	$\underline{\hspace{2cm}} + 5\ 200 = 7500$	$\underline{\hspace{2cm}} - 250 = 7880$	A 14	2 300 8 130
15.) ●●	$\underline{\hspace{2cm}} + 2\ 300 = 7300$	$4\ 400 - \underline{\hspace{2cm}} = 3600$	A 15	5 000 800

© 2015 Bernhard Storch

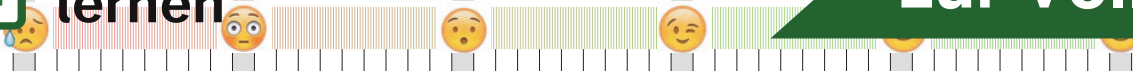
erstellt mit RAGTIME EDU tools



netzwerk
lernen

Vergleiche mit dem Lösungstreifen und markiere hier, wie du

zur Vollversion



Addition und Subtraktion im Zahlenraum 10 000

Code Nr. 2

Nr. 2

Name:
Klasse:

Datum:

1.) ●●	$3\ 000 + 300 = \underline{\hspace{2cm}}$	$2\ 800 + 20 = \underline{\hspace{2cm}}$	A 1	3300 2820
2.) ●●	$2\ 318 - 2\ 000 = \underline{\hspace{2cm}}$	$200 + 2\ 000 = \underline{\hspace{2cm}}$	A 2	318 2200
3.) ●●	$1\ 000 + 2\ 000 = \underline{\hspace{2cm}}$	$3\ 195 - 200 = \underline{\hspace{2cm}}$	A 3	3000 2995
4.) ●●	$3\ 125 - 300 = \underline{\hspace{2cm}}$	$2\ 000 - 1\ 500 = \underline{\hspace{2cm}}$	A 4	2825 500
5.) ●●	$1\ 095 - 100 = \underline{\hspace{2cm}}$	$3\ 000 - 1\ 300 = \underline{\hspace{2cm}}$	A 5	995 1700
6.) ●●	$3\ 507 - 1\ 300 = \underline{\hspace{2cm}}$	$1\ 901 - 450 = \underline{\hspace{2cm}}$	A 6	2207 1451
7.) ●●	$4\ 148 - \underline{\hspace{2cm}} = 3148$	$6\ 000 - \underline{\hspace{2cm}} = 5110$	A 7	1 000 890
8.) ●●	$4\ 000 + 2\ 000 = \underline{\hspace{2cm}}$	$1\ 000 + \underline{\hspace{2cm}} = 5100$	A 8	6000 4 100
9.) ●●	$400 + 5\ 500 = \underline{\hspace{2cm}}$	$510 - \underline{\hspace{2cm}} = 110$	A 9	5900 400
10.) ●●	$6\ 900 + \underline{\hspace{2cm}} = 7800$	$5\ 200 + 1\ 000 = \underline{\hspace{2cm}}$	A 10	900 6200
11.) ●●	$5\ 223 - 700 = \underline{\hspace{2cm}}$	$900 + 6\ 000 = \underline{\hspace{2cm}}$	A 11	4523 6900
12.) ●●	$1\ 200 - \underline{\hspace{2cm}} = 1000$	$2\ 000 + 90 = \underline{\hspace{2cm}}$	A 12	200 2090
13.) ●●	$2\ 900 + 6\ 100 = \underline{\hspace{2cm}}$	$5\ 000 - 4\ 000 = \underline{\hspace{2cm}}$	A 13	9000 1000
14.) ●●	$\underline{\hspace{2cm}} - 1\ 400 = 1980$	$\underline{\hspace{2cm}} - 800 = 5200$	A 14	3 380 6 000
15.) ●●	$\underline{\hspace{2cm}} - 2\ 400 = 4600$	$5\ 000 + 1\ 600 = \underline{\hspace{2cm}}$	A 15	7 000 6600

© 2015 Bernhard Storch

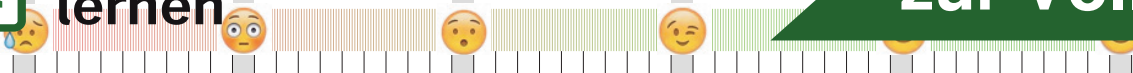
erstellt mit RAGTIME EDU tools



netzwerk
lernen

Vergleiche mit dem Lösungstreifen und markiere hier, wie du

zur Vollversion



Addition und Subtraktion im Zahlenraum 10 000

Code Nr. 3

Nr. 3

Name,
Klasse:

Datum:

1.) ●●	$1\ 600 + 2\ 100 = \underline{\hspace{2cm}}$	$1\ 821 - 40 = \underline{\hspace{2cm}}$	A 1	3700 1781
2.) ●●	$2\ 900 + 990 = \underline{\hspace{2cm}}$	$1\ 700 + 370 = \underline{\hspace{2cm}}$	A 2	3890 2070
3.) ●●	$1\ 000 + 2\ 000 = \underline{\hspace{2cm}}$	$1\ 900 - 1\ 700 = \underline{\hspace{2cm}}$	A 3	3000 200
4.) ●●	$4\ 300 + 400 = \underline{\hspace{2cm}}$	$3\ 749 - 2\ 000 = \underline{\hspace{2cm}}$	A 4	4700 1749
5.) ●●	$3\ 072 - 200 = \underline{\hspace{2cm}}$	$3\ 219 - 100 = \underline{\hspace{2cm}}$	A 5	2872 3119
6.) ●●	$2\ 500 - 1\ 000 = \underline{\hspace{2cm}}$	$1\ 000 + \underline{\hspace{2cm}} = 3000$	A 6	1500 2 000
7.) ●●	$4\ 000 + 2\ 000 = \underline{\hspace{2cm}}$	$3\ 000 - 200 = \underline{\hspace{2cm}}$	A 7	6000 2800
8.) ●●	$4\ 000 + 1\ 800 = \underline{\hspace{2cm}}$	$5\ 000 + 2\ 000 = \underline{\hspace{2cm}}$	A 8	5800 7000
9.) ●●	$4\ 500 + \underline{\hspace{2cm}} = 7337$	$3\ 000 + \underline{\hspace{2cm}} = 5000$	A 9	2 837 2 000
10.) ●●	$3\ 000 - 2\ 000 = \underline{\hspace{2cm}}$	$6\ 000 + 5 = \underline{\hspace{2cm}}$	A 10	1000 6005
11.) ●●	$5\ 000 - 3\ 000 = \underline{\hspace{2cm}}$	$750 + \underline{\hspace{2cm}} = 4550$	A 11	2000 3 800
12.) ●●	$5\ 432 - 2\ 000 = \underline{\hspace{2cm}}$	$5\ 000 - \underline{\hspace{2cm}} = 2000$	A 12	3432 3 000
13.) ●●	$\underline{\hspace{2cm}} - 1\ 300 = 1700$	$\underline{\hspace{2cm}} - 2\ 000 = 2700$	A 13	3 000 4 700
14.) ●●	$6\ 000 + 3\ 400 = \underline{\hspace{2cm}}$	$6\ 327 - 1\ 000 = \underline{\hspace{2cm}}$	A 14	9400 5327
15.) ●●	$3\ 000 - \underline{\hspace{2cm}} = 1200$	$6\ 000 + \underline{\hspace{2cm}} = 7100$	A 15	1 800 1 100

© 2015 Bernhard Storch


erstellt mit RAGTIME EDU tools



netzwerk
lernen

Vergleiche mit dem Lösungstreifen und markiere hier, wie du

zur Vollversion



Name:
Klasse:

Datum:

1.) ●●	$2\ 100 - 270 = \underline{\hspace{2cm}}$	$2\ 300 - 1\ 300 = \underline{\hspace{2cm}}$	A 1	1830 1000
2.) ●●	$2\ 177 - 1\ 900 = \underline{\hspace{2cm}}$	$280 + 3\ 900 = \underline{\hspace{2cm}}$	A 2	277 4180
3.) ●●	$4\ 044 - 680 = \underline{\hspace{2cm}}$	$700 + 2\ 000 = \underline{\hspace{2cm}}$	A 3	3364 2700
4.) ●●	$5\ 000 + 419 = \underline{\hspace{2cm}}$	$4\ 000 + 200 = \underline{\hspace{2cm}}$	A 4	5419 4200
5.) ●●	$4\ 124 - 80 = \underline{\hspace{2cm}}$	$2\ 000 + 2\ 000 = \underline{\hspace{2cm}}$	A 5	4044 4000
6.) ●●	$780 + \underline{\hspace{2cm}} = 4480$	$3\ 000 + \underline{\hspace{2cm}} = 3600$	A 6	3 700 600
7.) ●●	$4\ 000 - 3\ 000 = \underline{\hspace{2cm}}$	$5\ 479 - \underline{\hspace{2cm}} = 4799$	A 7	1000 680
8.) ●●	$3\ 410 - \underline{\hspace{2cm}} = 2620$	$6\ 000 + 800 = \underline{\hspace{2cm}}$	A 8	790 6800
9.) ●●	$4\ 825 - \underline{\hspace{2cm}} = 4325$	$6\ 400 + 1\ 000 = \underline{\hspace{2cm}}$	A 9	500 7400
10.) ●●	$3\ 700 + 2\ 000 = \underline{\hspace{2cm}}$	$5\ 000 + \underline{\hspace{2cm}} = 6100$	A 10	5700 1 100
11.) ●●	$70 + 8\ 000 = \underline{\hspace{2cm}}$	$7\ 222 - \underline{\hspace{2cm}} = 6222$	A 11	8070 1 000
12.) ●●	$3\ 000 - 2\ 000 = \underline{\hspace{2cm}}$	$6\ 000 + 700 = \underline{\hspace{2cm}}$	A 12	1000 6700
13.) ●●	$804 - 78 = \underline{\hspace{2cm}}$	$\underline{\hspace{2cm}} + 310 = 4110$	A 13	726 3 800
14.) ●●	$4\ 400 - 2\ 100 = \underline{\hspace{2cm}}$	$5\ 216 - \underline{\hspace{2cm}} = 3516$	A 14	2300 1 700
15.) ●●	$\underline{\hspace{2cm}} - 2\ 500 = 3400$	$\underline{\hspace{2cm}} + 5\ 400 = 6400$	A 15	5 900 1 000

© 2015 Bernhard Storch

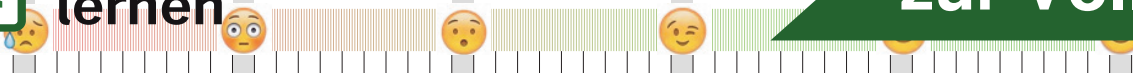
erstellt mit RAGTIME EDU tools



netzwerk
lernen

Vergleiche mit dem Lösungstreifen und markiere hier, wie du

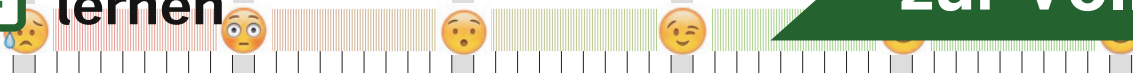
zur Vollversion



Name:
Klasse:

Datum:

1.) ●●	$3\ 000 - 700 = \underline{\hspace{2cm}}$	$400 + 620 = \underline{\hspace{2cm}}$	A 1	2300 1020
2.) ●●	$730 - 300 = \underline{\hspace{2cm}}$	$570 + 1\ 000 = \underline{\hspace{2cm}}$	A 2	430 1570
3.) ●●	$620 + 2\ 000 = \underline{\hspace{2cm}}$	$2\ 063 - 1\ 000 = \underline{\hspace{2cm}}$	A 3	2620 1063
4.) ●●	$2\ 507 - 1\ 900 = \underline{\hspace{2cm}}$	$2\ 212 - 60 = \underline{\hspace{2cm}}$	A 4	607 2152
5.) ●●	$5\ 133 - 440 = \underline{\hspace{2cm}}$	$2\ 420 - 1\ 000 = \underline{\hspace{2cm}}$	A 5	4693 1420
6.) ●●	$1\ 818 - 100 = \underline{\hspace{2cm}}$	$5\ 000 - \underline{\hspace{2cm}} = 4930$	A 6	1718 70
7.) ●●	$3\ 000 - 1\ 500 = \underline{\hspace{2cm}}$	$5\ 545 - \underline{\hspace{2cm}} = 4865$	A 7	1500 680
8.) ●●	$2\ 600 - 2\ 000 = \underline{\hspace{2cm}}$	$5\ 400 + \underline{\hspace{2cm}} = 6400$	A 8	600 1\ 000
9.) ●●	$3\ 600 + \underline{\hspace{2cm}} = 6100$	$3\ 018 - 3\ 000 = \underline{\hspace{2cm}}$	A 9	2\ 500 18
10.) ●●	$4\ 100 - 3\ 000 = \underline{\hspace{2cm}}$	$220 + 3\ 200 = \underline{\hspace{2cm}}$	A 10	1100 3420
11.) ●●	$4\ 000 + 1\ 100 = \underline{\hspace{2cm}}$	$\underline{\hspace{2cm}} + 2\ 700 = 8300$	A 11	5100 5\ 600
12.) ●●	$7\ 131 - 1\ 200 = \underline{\hspace{2cm}}$	$\underline{\hspace{2cm}} - 2\ 000 = 4724$	A 12	5931 6\ 724
13.) ●●	$\underline{\hspace{2cm}} - 1\ 500 = 2633$	$414 - \underline{\hspace{2cm}} = 254$	A 13	4\ 133 160
14.) ●●	$6\ 229 - 2\ 500 = \underline{\hspace{2cm}}$	$4\ 000 - \underline{\hspace{2cm}} = 2000$	A 14	3729 2\ 000
15.) ●●	$7\ 914 - 1\ 000 = \underline{\hspace{2cm}}$	$\underline{\hspace{2cm}} + 2\ 700 = 5400$	A 15	6914 2\ 700



Name:
Klasse:

Datum:

1.) ●●	$3\ 173 - 180 = \underline{\hspace{2cm}}$	$2\ 500 - 200 = \underline{\hspace{2cm}}$	A 1	2993 2300
2.) ●●	$4\ 000 + 170 = \underline{\hspace{2cm}}$	$300 + 820 = \underline{\hspace{2cm}}$	A 2	4170 1120
3.) ●●	$4\ 436 - 280 = \underline{\hspace{2cm}}$	$4\ 000 + 510 = \underline{\hspace{2cm}}$	A 3	4156 4510
4.) ●●	$2\ 108 - 400 = \underline{\hspace{2cm}}$	$4\ 500 - 800 = \underline{\hspace{2cm}}$	A 4	1708 3700
5.) ●●	$5\ 000 + 1\ 112 = \underline{\hspace{2cm}}$	$4\ 400 + 1\ 000 = \underline{\hspace{2cm}}$	A 5	6112 5400
6.) ●●	$4\ 500 + \underline{\hspace{2cm}} = 5600$	$4\ 000 + \underline{\hspace{2cm}} = 4460$	A 6	1\ 100 460
7.) ●●	$3\ 361 - 100 = \underline{\hspace{2cm}}$	$4\ 000 - \underline{\hspace{2cm}} = 3000$	A 7	3261 1\ 000
8.) ●●	$700 + 1\ 800 = \underline{\hspace{2cm}}$	$3\ 400 - \underline{\hspace{2cm}} = 3310$	A 8	2500 90
9.) ●●	$3\ 000 + 2\ 000 = \underline{\hspace{2cm}}$	$2\ 113 - 1\ 700 = \underline{\hspace{2cm}}$	A 9	5000 413
10.) ●●	$600 + 900 = \underline{\hspace{2cm}}$	$5\ 413 - \underline{\hspace{2cm}} = 4413$	A 10	1500 1\ 000
11.) ●●	$\underline{\hspace{2cm}} + 6\ 100 = 6300$	$6\ 000 + \underline{\hspace{2cm}} = 6740$	A 11	200 740
12.) ●●	$5\ 700 + \underline{\hspace{2cm}} = 7700$	$5\ 626 - \underline{\hspace{2cm}} = 2726$	A 12	2\ 000 2\ 900
13.) ●●	$\underline{\hspace{2cm}} + 730 = 5630$	$3\ 000 + 2\ 700 = \underline{\hspace{2cm}}$	A 13	4\ 900 5700
14.) ●●	$6\ 000 - 2\ 300 = \underline{\hspace{2cm}}$	$400 + \underline{\hspace{2cm}} = 3400$	A 14	3700 3\ 000
15.) ●●	$\underline{\hspace{2cm}} - 4\ 000 = 900$	$\underline{\hspace{2cm}} + 2\ 000 = 7000$	A 15	4\ 900 5\ 000

© 2015 Bernhard Storch

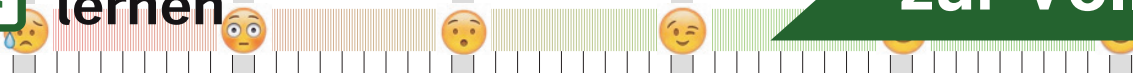
erstellt mit RAGTIME EDU tools



netzwerk
lernen

Vergleiche mit dem Lösungstreifen und markiere hier, wie du

zur Vollversion



Name:
Klasse:

Datum:

1.) ●●	$2\ 000 - 1\ 900 = \underline{\hspace{2cm}}$	$1\ 423 - 1\ 000 = \underline{\hspace{2cm}}$	A 1	100 423
2.) ●●	$2\ 100 + 1\ 000 = \underline{\hspace{2cm}}$	$4\ 000 - 1\ 000 = \underline{\hspace{2cm}}$	A 2	3100 3000
3.) ●●	$4\ 000 + 500 = \underline{\hspace{2cm}}$	$2\ 186 - 1\ 900 = \underline{\hspace{2cm}}$	A 3	4500 286
4.) ●●	$2\ 000 + 300 = \underline{\hspace{2cm}}$	$2\ 000 + 1\ 200 = \underline{\hspace{2cm}}$	A 4	2300 3200
5.) ●●	$3\ 000 + 1\ 200 = \underline{\hspace{2cm}}$	$2\ 000 + 3\ 000 = \underline{\hspace{2cm}}$	A 5	4200 5000
6.) ●●	$3\ 347 - \underline{\hspace{2cm}} = 1347$	$200 + 3\ 600 = \underline{\hspace{2cm}}$	A 6	2 000 3800
7.) ●●	$5\ 000 + 800 = \underline{\hspace{2cm}}$	$3\ 302 - 800 = \underline{\hspace{2cm}}$	A 7	5800 2502
8.) ●●	$3\ 500 + \underline{\hspace{2cm}} = 6300$	$3\ 300 + \underline{\hspace{2cm}} = 4300$	A 8	2 800 1 000
9.) ●●	$4\ 484 - \underline{\hspace{2cm}} = 2184$	$4\ 228 - 1\ 000 = \underline{\hspace{2cm}}$	A 9	2 300 3228
10.) ●●	$4\ 019 - 3\ 000 = \underline{\hspace{2cm}}$	$5\ 046 - 580 = \underline{\hspace{2cm}}$	A 10	1019 4466
11.) ●●	$2\ 000 + \underline{\hspace{2cm}} = 5000$	$4\ 000 + 4\ 000 = \underline{\hspace{2cm}}$	A 11	3 000 8000
12.) ●●	$1\ 800 + \underline{\hspace{2cm}} = 2200$	$\underline{\hspace{2cm}} + 990 = 8190$	A 12	400 7 200
13.) ●●	$\underline{\hspace{2cm}} - 2\ 200 = 3025$	$\underline{\hspace{2cm}} + 2\ 000 = 8000$	A 13	5 225 6 000
14.) ●●	$2\ 000 - 1\ 700 = \underline{\hspace{2cm}}$	$6\ 629 - \underline{\hspace{2cm}} = 4929$	A 14	300 1 700
15.) ●●	$5\ 000 - \underline{\hspace{2cm}} = 4720$	$4\ 000 + \underline{\hspace{2cm}} = 6000$	A 15	280 2 000

© 2015 Bernhard Storch

erstellt mit RAGTIME EDU tools



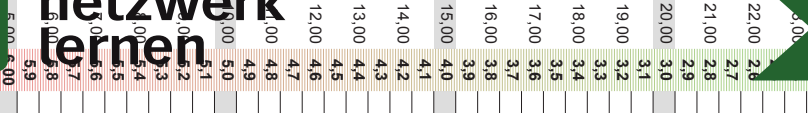
netzwerk
fernen

zur Vollversion

Name,
Klasse:

Datum:

1.) ●●	$2\ 474 - 1\ 100 = \underline{\hspace{2cm}}$	$983 - 900 = \underline{\hspace{2cm}}$	A 1	1374 83
2.) ●●	$2\ 000 - 80 = \underline{\hspace{2cm}}$	$3\ 000 - 2\ 000 = \underline{\hspace{2cm}}$	A 2	1920 1000
3.) ●●	$4\ 000 + 66 = \underline{\hspace{2cm}}$	$4\ 333 - 300 = \underline{\hspace{2cm}}$	A 3	4066 4033
4.) ●●	$5\ 000 - 200 = \underline{\hspace{2cm}}$	$2\ 704 - 2\ 500 = \underline{\hspace{2cm}}$	A 4	4800 204
5.) ●●	$4\ 000 + 390 = \underline{\hspace{2cm}}$	$5\ 400 - 300 = \underline{\hspace{2cm}}$	A 5	4390 5100
6.) ●●	$19 + \underline{\hspace{2cm}} = 1319$	$50 + \underline{\hspace{2cm}} = 3550$	A 6	1 300 3 500
7.) ●●	$500 + \underline{\hspace{2cm}} = 700$	$4\ 000 + 2\ 000 = \underline{\hspace{2cm}}$	A 7	200 6000
8.) ●●	$4\ 161 - \underline{\hspace{2cm}} = 3161$	$4\ 000 - \underline{\hspace{2cm}} = 2000$	A 8	1 000 2 000
9.) ●●	$1\ 100 + \underline{\hspace{2cm}} = 2100$	$5\ 000 + \underline{\hspace{2cm}} = 5120$	A 9	1 000 120
10.) ●●	$6\ 600 + \underline{\hspace{2cm}} = 7140$	$5\ 498 - \underline{\hspace{2cm}} = 3498$	A 10	540 2 000
11.) ●●	$700 + \underline{\hspace{2cm}} = 6400$	$\underline{\hspace{2cm}} + 1\ 100 = 6100$	A 11	5 700 5 000
12.) ●●	$4\ 234 - 3\ 700 = \underline{\hspace{2cm}}$	$\underline{\hspace{2cm}} + 2\ 000 = 7000$	A 12	534 5 000
13.) ●●	$2\ 000 + \underline{\hspace{2cm}} = 2500$	$7\ 000 - 2\ 100 = \underline{\hspace{2cm}}$	A 13	500 4900
14.) ●●	$6\ 400 + \underline{\hspace{2cm}} = 6900$	$\underline{\hspace{2cm}} - 1\ 900 = 1466$	A 14	500 3 366
15.) ●●	$3\ 000 + \underline{\hspace{2cm}} = 3800$	$5\ 200 + 1\ 000 = \underline{\hspace{2cm}}$	A 15	800 6200



Addition und Subtraktion im Zahlenraum 10 000

Code Nr. 50

Nr. 50

Name,
Klasse:

Datum:

1.) ●●	$4\ 000 + 241 = \underline{\hspace{2cm}}$	$1\ 000 + 600 = \underline{\hspace{2cm}}$	A 1	4241 1600
2.) ●●	$2\ 720 - 700 = \underline{\hspace{2cm}}$	$3\ 500 - 1\ 300 = \underline{\hspace{2cm}}$	A 2	2020 2200
3.) ●●	$1\ 500 + 520 = \underline{\hspace{2cm}}$	$3\ 000 - 1\ 200 = \underline{\hspace{2cm}}$	A 3	2020 1800
4.) ●●	$40 + 2\ 700 = \underline{\hspace{2cm}}$	$2\ 700 - 2\ 000 = \underline{\hspace{2cm}}$	A 4	2740 700
5.) ●●	$4\ 354 - 1\ 000 = \underline{\hspace{2cm}}$	$3\ 200 - 2\ 600 = \underline{\hspace{2cm}}$	A 5	3354 600
6.) ●●	$920 + \underline{\hspace{2cm}} = 2620$	$4\ 100 - 2\ 000 = \underline{\hspace{2cm}}$	A 6	1 700 2100
7.) ●●	$4\ 355 - 280 = \underline{\hspace{2cm}}$	$5\ 000 + 540 = \underline{\hspace{2cm}}$	A 7	4075 5540
8.) ●●	$4\ 000 + \underline{\hspace{2cm}} = 4300$	$5\ 000 - \underline{\hspace{2cm}} = 3300$	A 8	300 1 700
9.) ●●	$5\ 000 + \underline{\hspace{2cm}} = 7100$	$4\ 118 - \underline{\hspace{2cm}} = 1318$	A 9	2 100 2 800
10.) ●●	$6\ 000 - \underline{\hspace{2cm}} = 4000$	$3\ 600 - \underline{\hspace{2cm}} = 2400$	A 10	2 000 1 200
11.) ●●	$\underline{\hspace{2cm}} - 2\ 000 = 3000$	$4\ 000 + \underline{\hspace{2cm}} = 5000$	A 11	5 000 1 000
12.) ●●	$2\ 100 + \underline{\hspace{2cm}} = 2600$	$\underline{\hspace{2cm}} - 2\ 700 = 3300$	A 12	500 6 000
13.) ●●	$8\ 000 + \underline{\hspace{2cm}} = 8340$	$4\ 000 + \underline{\hspace{2cm}} = 4200$	A 13	340 200
14.) ●●	$7\ 627 - \underline{\hspace{2cm}} = 7027$	$3\ 200 + \underline{\hspace{2cm}} = 3600$	A 14	600 400
15.) ●●	$2\ 013 - 1 = \underline{\hspace{2cm}}$	$1\ 018 - 200 = \underline{\hspace{2cm}}$	A 15	2012 818

© 2015 Bernhard Storch

erstellt mit RAGTIME EDU tools



netzwerk
fernen

zur Vollversion

